

March Kindergarten Homework

	Monday	Tuesday	Wednesday	Thursday	Friday
Week 1	Write a story about your favorite season.	Practice rainbow writing your sight word: "want".	Solve this addition word problem. Then write to explain how you solved it: Ann had 7 balloons. Her dad gave her 4 more. How many does she have now?	Complete the sight word "Find, tally, graph" page attached.	Write a list of facts about bats. Draw a picture of a bat and label these body parts: wings, body, teeth, eyes.
Week 2	Make a list of things you would need to pack for a trip.	Practice rainbow writing your sight word: "for"	Solve this addition word problem. Then write to explain how you solved it: Ron had 15 rocks. Sam also had some rocks. Together, they had 21. How many did Sam have?	Read a story with your family. Write to tell about the main event.	Write down what you know about the season Spring.
week 3	Write a letter to your favorite storybook character.	Practice rainbow writing your sight word: "was"	Solve this subtraction word problem. Then write to explain how you solved it: I had 18 pieces of candy. My friend ate 4 pieces. How many are left?	Complete the "write, make, expand" with numbers 13, 14, 15.	Go find a rock outside. Write down the properties of the rock. What color is it? Texture? Size? etc.
week 4	Create an invitation to a pretend party! Make sure to include all the important parts of an invitation!	Practice rainbow writing your sight word: "them"	Solve this subtraction word problem. Then write to explain how you solved it: There were 11 frogs on a lily pad. 7 of them jumped off. How many were left?	Solve this problem: Andy had 29 cents. What combination of coins could he have to make that total of 29 cents?	Go outside and collect a sample of soil/dirt. Draw and label what you see. What is it made of? Write to tell about it.
week 5	Write a story about a nocturnal animal.	Practice rainbow writing your sight word: "they"	Solve this addition word problem. Then write to explain how you solved it: 16 bees were in the hive. 5 more joined the hive. How many were there altogether?	Complete the coin sort attached below.	Read a story with your family. Write 2 sentences to tell about the main character.


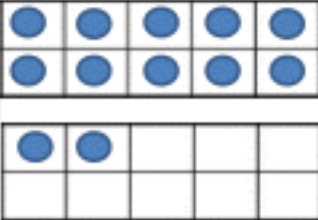

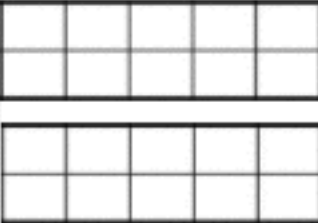

March Kindergarten Homework

Penny	Nickel	Dime	Quarter
			

Name: _____

Thomas Jefferson	state symbols or a bald eagle	one cent	Twenty-five cents
oak branch, torch, and olive branch	Abraham Lincoln	Monticello	Franklin D. Roosevelt
silver/rough edges	ten cents	brown/smooth edges	silver/rough edges
Lincoln Memorial	George Washington	five cents	silver/smooth edges

March Kindergarten Homework

Write, Make, Expand, Base 10!			
Write	Make	Expand	Base 10
12		$\begin{array}{r} 1 \text{ tens} \\ 2 \text{ ones} \\ 10 + 2 = 12 \end{array}$	
		$\begin{array}{r} \text{ } \text{ tens} \\ \text{ } \text{ ones} \\ \text{ } + \text{ } = \text{ } \end{array}$	
		$\begin{array}{r} \text{ } \text{ tens} \\ \text{ } \text{ ones} \\ \text{ } + \text{ } = \text{ } \end{array}$	
		$\begin{array}{r} \text{ } \text{ tens} \\ \text{ } \text{ ones} \\ \text{ } + \text{ } = \text{ } \end{array}$	

March Kindergarten Homework

Sight Words: Find, Tally & Graph

like look that like
this
that like look this
look this that
that like look
look that this
look like like
like that



Tally Chart

like	
look	
this	
that	

like	look	this	that

Name _____